

CAMBRIDGE PRIMARY MATHEMATICS 2

REVIEW UNIT 11 (WS1)

Name: _____

Date: _____

Class: _____

Part 1. Use the words to label the pictures.

anticlockwise	left	clockwise	angle
quarter	right	half	whole

a 

turn _____

b 

turn _____

c 

go _____

d 


go _____

e 

make a _____ turn

f 

make a _____ turn


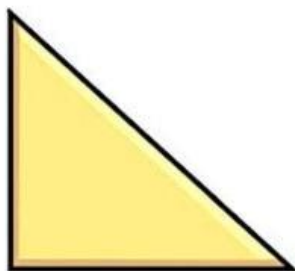
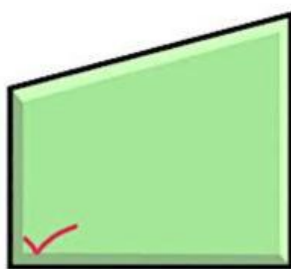
g 

make a _____ turn


h 

make a right _____ turn

Part 2. Tick the right angles in these shapes.



Part 3. The tortoise always looks in the direction he is walking. He travels along the green path.



How many times did he turn a quarter turn clockwise? _____

How many times did he turn a quarter turn anticlockwise? _____

How many right angle turns did he make altogether? _____