

# CAMBRIDGE PRIMARY MATHEMATICS 2

## REVIEW UNIT 11 (WS2)

Name: \_\_\_\_\_

Date: \_\_\_\_\_

Class: \_\_\_\_\_

**Part 1.** Each shape has been turned a quarter turn clockwise or anticlockwise. Write “a quarter turn clockwise” or “a quarter turn anticlockwise” under each picture.

_____	_____	_____
_____	_____	_____
_____	_____	_____
_____	_____	_____

**Quarter turn clockwise**

**Quarter turn anticlockwise**

**Part 2.** Write **half turn**, **quarter turn**, **full turn** in each blank space provided:

*Example:*



quarter turn




half turn



full turn



.....



.....

Part 3. Half turn or quarter turn? Colour the correct answer. [3]

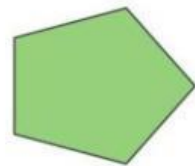

a



Half turn

Quarter turn


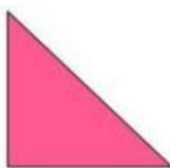
b



Half turn

Quarter turn

c



Half turn

Quarter turn

d



Half turn

Quarter turn

e



Half turn

Quarter turn


f



Half turn

Quarter turn

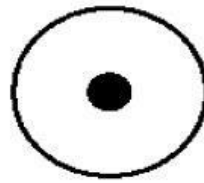
Part 4. Which of these dots show the centre of the circle?



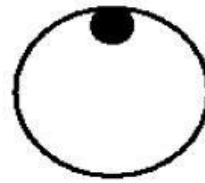
A



B



C



D