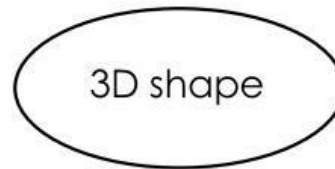
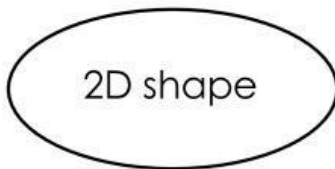
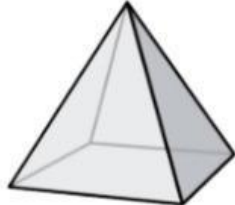
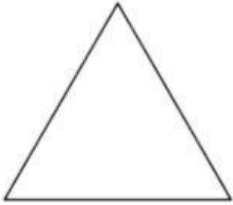


CAMBRIDGE PRIMARY MATHEMATICS 2

UNIT 2 – REVISION

Part 1. Are these shape 2D or 3D? Draw a line to match.



Part 2.

I have 2 faces.

I have 1 curved surface.

What I am?

Answer: I am a _____

Part 3.

I have 6 faces.

All my faces are square.

All my faces are the same size.

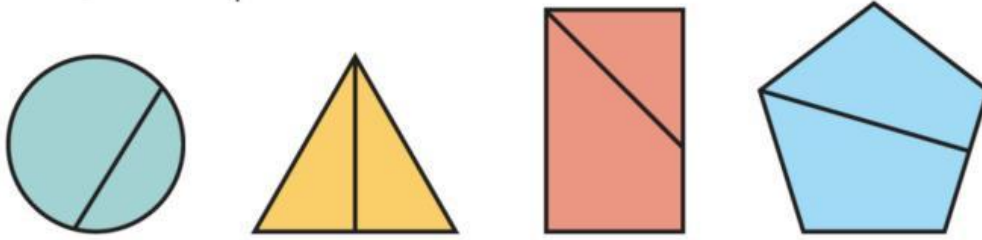
What I am?

Answer: I am a _____

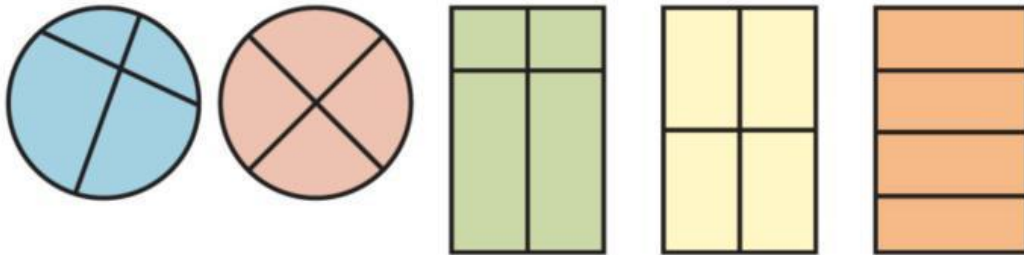
Part 4. Draw a line to join each shape with the matching symmetrical half.



Part 5. Tick ✓ the shapes that show half.


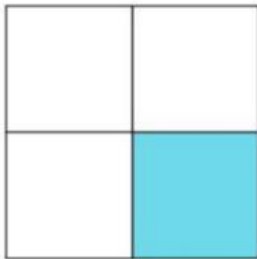


Part 6. Tick ✓ the shapes that show quarters

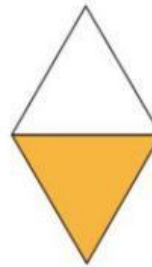


Part 7. What fraction has been coloured?

a



b



c

