


Menu



Sandwich \$3.25



Pizza \$2.95



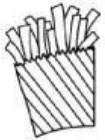
Chicken \$4.60



Salad \$3.75




Nuggets \$4.55



French Fries \$1.10



Onion Rings \$2.50



Juice Box \$0.55



Soda \$1.25



Milk \$0.70



Lemonade \$1.10



Donut \$0.95




Ice Cream \$2.00



Hot Dog \$4.50



Potato \$1.35



Hamburger \$5.45



Taco \$3.65



Mac & Cheese \$3.90



Sushi \$7.15



Eggs & Bacon \$4.00



Pancakes \$5.05



Apple \$0.65



Watermelon \$1.15



Pear \$0.50



Pretzel \$2.05



Cinnamon Bun \$2.15

Name: _____

Multiplication

Directions: Use the Menu list to find the price of each food. Then find the **total** price.

1. Three



\$ _____

2. Four




\$ _____

3. Five




\$ _____

4. Three



\$ _____

5. Four



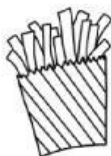
\$ _____

6. Six




\$ _____

7. Three



\$ _____

8. Four



\$ _____

Name: _____

Multiplication


Directions: Use the Menu list to find the price of each food. Then find the **total** price.

1. Four



\$ _____

2. Five



\$ _____

3. Three



\$ _____

4. Five




\$ _____

5. Four



\$ _____

6. Three



\$ _____

7. Six



\$ _____

8. Four



\$ _____