

Lembar Kerja Peserta Didik
(LPKD)



Nama : _____

Kelas : 2C


Ayo, kita temukan berat sayuran tersebut dalam satuan kg.




20
ons



= kg



10
ons



= kg



10
ons




= kg



30
ons



= kg



40
ons



= kg

