



Cambridge Primary Programme



Name: _____

Class: _____

Date: _____

END OF UNIT 1 REVISION

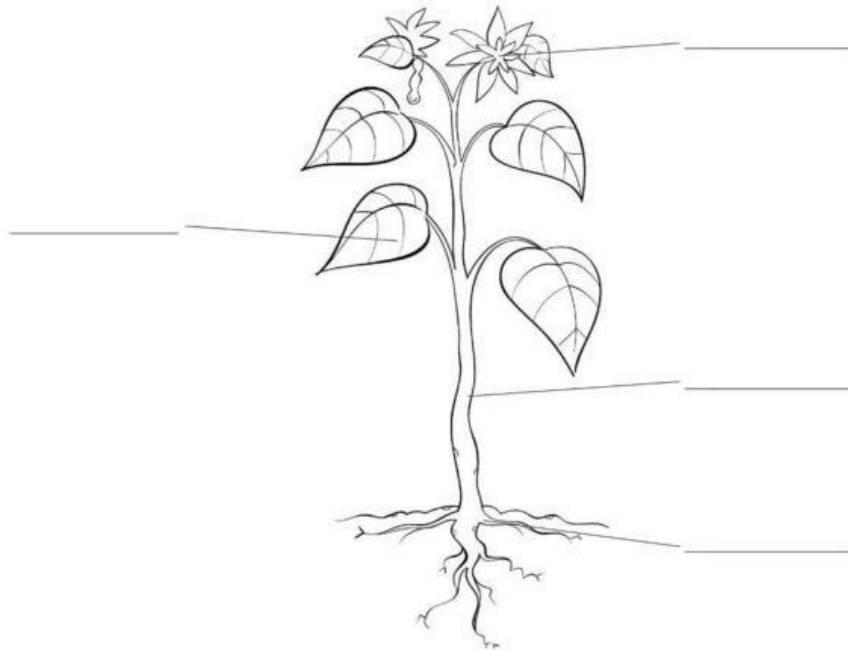
1. Are these things alive or not alive? Write or draw them in the correct box.




Alive	Not alive

2. Use these words to label the four plant parts below.

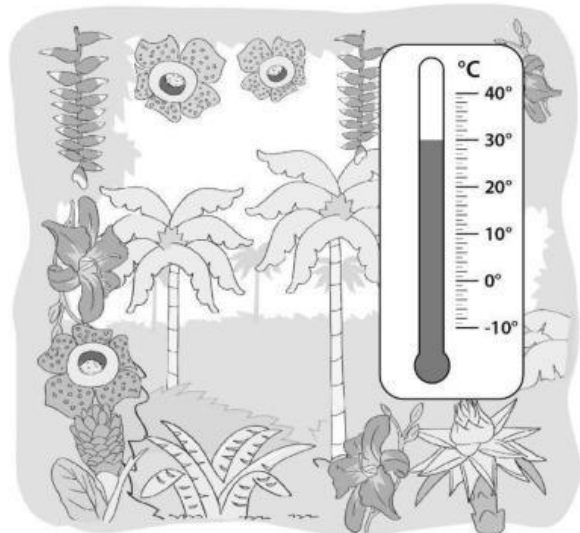
leaf *stem* *flower* *root*



3. Some plants grow in cold places. Others grow in hot places. Use the images to answer the questions below.



cold environment

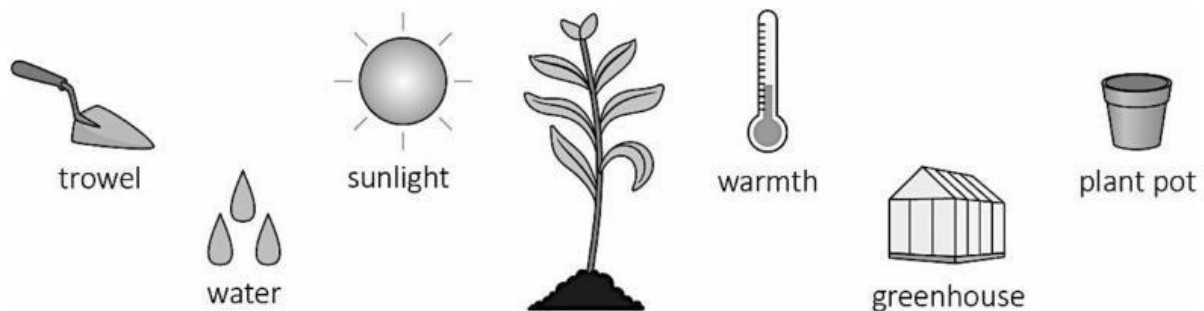


hot environment

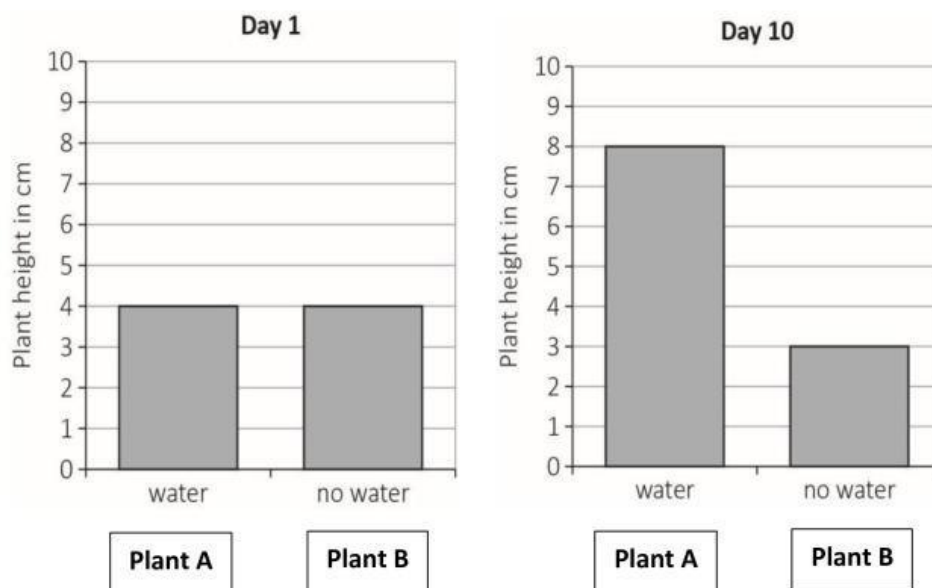
- a. The temperature in the cold environment is _____ °C.
- b. The temperature in the hot environment is _____ °C.
- c. More plants will grow in the _____ environment.

d. Fewer plants will grow in the _____ environment.

4. Draw circles around the three things that a plant needs to grow.



5. Sofia measured the height of two plants. Plant A had water and plant B had no water. Look at her two bar charts and then answer the questions.



a How tall was plant A on day 1?

b How tall was plant B on day 10?

c Between day 1 and day 10, how much did plant A grow?

d **Circle** the correct words to finish the sentence.

Plant A grew more because it **was sunny** / **was cold** / **had water**.