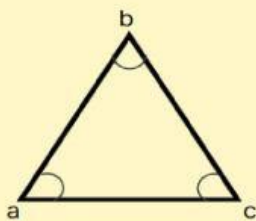
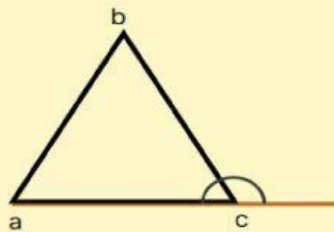


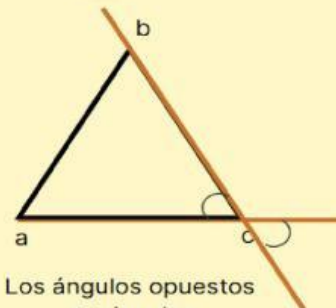
# PROPIEDADES



La suma de los ángulos internos suman  $180^\circ$

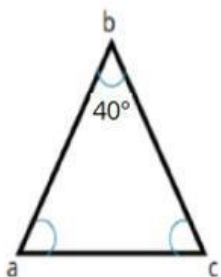


La suma de un ángulo interno y su adyacente suman  $180^\circ$

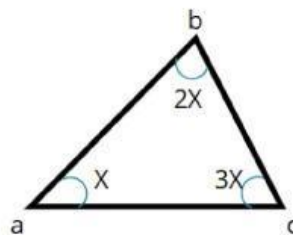


Los ángulos opuestos son iguales

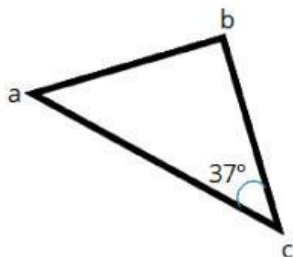
Hallar los ángulos de los triángulos



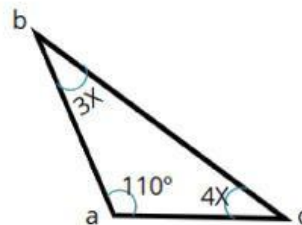
a = \_\_\_\_\_  
b = \_\_\_\_\_  
c = \_\_\_\_\_



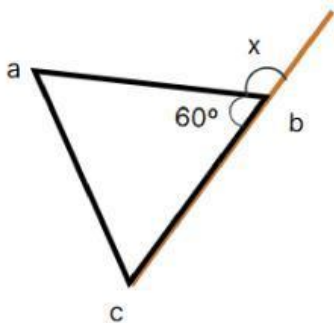
a = \_\_\_\_\_  
b = \_\_\_\_\_  
c = \_\_\_\_\_



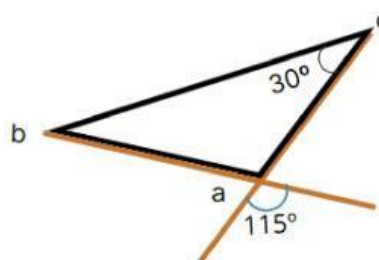
a = \_\_\_\_\_  
b = \_\_\_\_\_  
c = \_\_\_\_\_



a = \_\_\_\_\_  
b = \_\_\_\_\_  
c = \_\_\_\_\_



a = \_\_\_\_\_  
b = \_\_\_\_\_  
b = \_\_\_\_\_  
x = \_\_\_\_\_



a = \_\_\_\_\_  
b = \_\_\_\_\_  
c = \_\_\_\_\_