
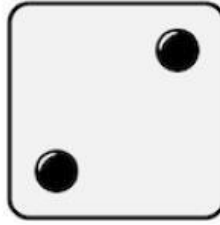





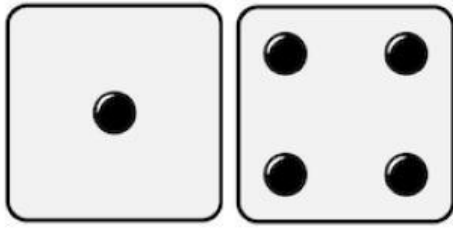


WORKSHEETS

write the number represented in the image



write the total number that represents the image.



Select the correct answer

Juan is 5 years old and tomorrow he turns another. How many years does he have left in total?

6 years old

9 years old

8 years old

There are 8 children in the classroom and 2 leave, how many are left in total?

5 children

6 children

10 children

I have 3 sweets and my dad gives me another one, how many sweets do I have left in total?

2 sweets

4 sweets

There is 1 dog in my house and my mom brings 2 more, how many dogs are left in total?

3 dogs

1 dog

2 dogs

Select the correct answer

What is 8 plus 6?

14

16

20

What is 10 minus 3?

4

7

9

What is 24 plus 8?

25

32

29

What is 17 plus 5?

27

19

22

Relate the operation on the left side to the correct result on the right side.

$2+4$

10

$2+8$

7

$10-3$

6

$14+8$

22

$30-14$

15

$25-10$

16