


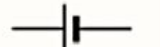




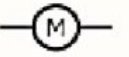



Year 4 Science -Term 2 Week 9

LO: Identify and understand the basic components of an electric circuit

Electric Circuits

Label the circuit below.

 battery	 closed switch	 open switch	 cell	 voltmeter
 buzzer	 lamp	 lamp	 motor	 wire

