

Nama : .....


Kelas : .....

# Mengukur Sudut

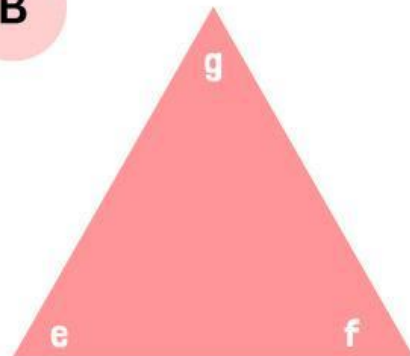
## Petunjuk Pengerjaan

Ukurlah masing-masing sudut pada bangun berikut menggunakan busur. Tuliskan hasilnya pada tabel


A



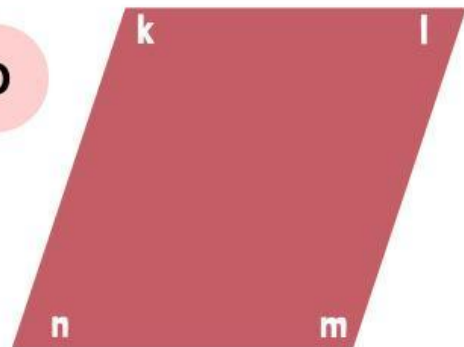
B



C



D



<b>Gambar</b>	<b>Sudut</b>	<b>Besar Sudut</b>
<b>A</b>	a	
	b	
	c	
	d	
<b>B</b>	e	
	f	
	g	
<b>C</b>	h	
	i	
	j	
	k	
<b>D</b>	l	
	m	
	n	