

Name: _____

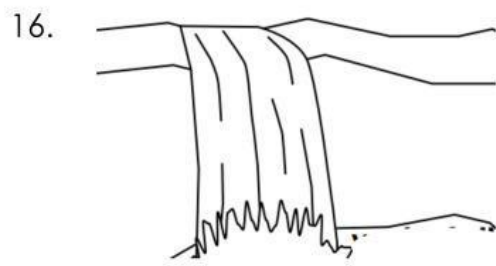
I.

Direction: Choose the letter of the correct answer and write it on the blank before the number.

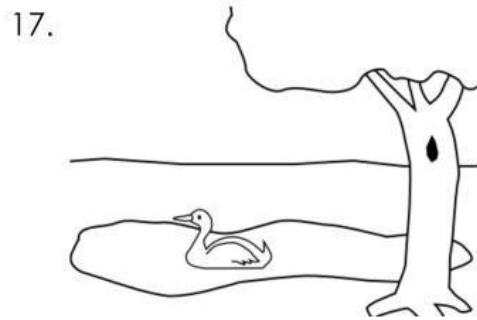
- _____ 1. It is a flat area of land.
a. plain b. volcano c. valley
- _____ 2. Highest landform with steep sides and pointed or round tip.
a. volcano b. plateau c. mountain
- _____ 3. A landform that has a opening. It ejects magma, volcanic ashes, and gases.
a. hill b. volcano c. valley
- _____ 4. A low flat area between two mountains or hills.
a. mountain b. hill c. valley
- _____ 5. A high landform with steep sides and a flat area on top.
a. plateau b. hill c. volcano
- _____ 6. High area of land but lower than mountains.
a. valley b. hill c. plain
- _____ 7. It is the largest water form not enclosed by land.
a. sea b. lake c. ocean
- _____ 8 . A second largest water form partly enclosed by a portion of land.
a. ocean b. river c. sea
- _____ 9. A large body of freshwater that comes from the mountainous area.
a. river b. ocean c. pond
- _____ 10. A water form that surrounded by land.
a. lake b. pond c. ocean
- _____ 11. Which refers to the daily condition of the atmosphere?
a. weather b. season c. temperature
- _____ 12. Strong winds tell us that the weather is _____.
a. sunny b. cloudy c. windy
- _____ 13. Mr. Ryu washed some clothes and let it dry outside. The weather is _____.
a. rainy day b. stormy day c. sunny day
- _____ 14. What type of weather it is, when Lance can fly a kite?
a. windy day b. stormy day c. rainy day
- _____ 15. Which of these ailments is common during rainy days?
a. chicken pox b. cold and cough c. dengue

II.

Direction: Fill in the blanks with letters to complete the land and water forms shown in the picture.



W A _ _ E _ _ _ A L _ _




P _ _ _ D



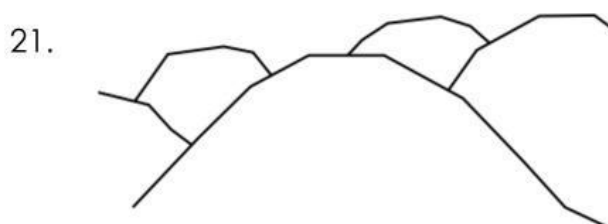
_ _ S L _ _ _ D



M _ _ U N _ _ _ _ N



V _ _ L L _ _ _



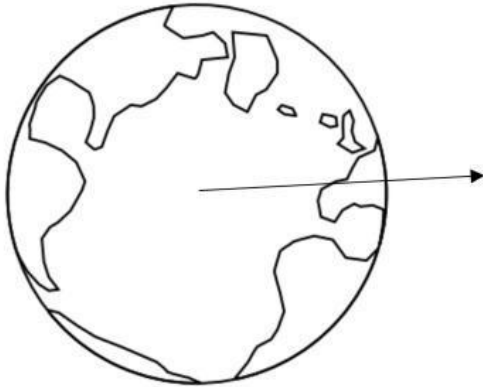
H _ _ _ L

22.



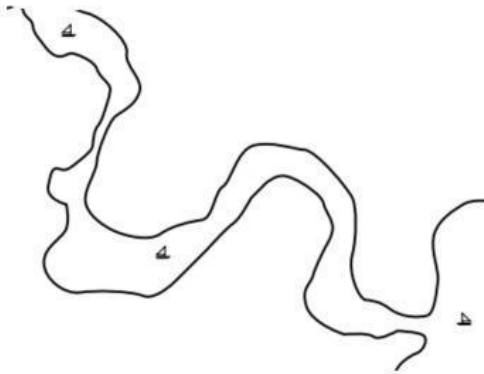
V _ _ L _ _ _ _ O

23.



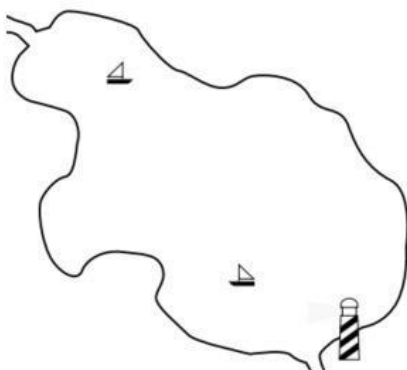
O _ _ _ A _ _

24.



R _ _ V _ _ _


25.



L _ _ _ E

II.

Direction: Observe the weather forecast below and answer the following questions.



26. Today is Saturday, the weather is _____.
27. On Monday, the weather will be _____.
28. On Wednesday, the weather will be _____.
29. On Friday, the weather will be _____.
30. On Tuesday, the weather Will be _____.
31. On Thursday, the weather will be _____.
32. On Sunday, the weather Will be _____.
33. What days are best for going to the beach? _____.
34. Which days can I fly a kite? _____.
35. Which day is probably going to flood? _____.