



LKPD

Lembar Kerja Peserta Didik

Nama : _____

Kelas : _____



STUDENT INFORMATION

Student
Photo

Name : _____

Birthday : _____

Allergies : _____

MEDICAL CONDITIONS

PARENT CONTACT INFORMATION

IMPORTANT NOTES

DAILY LESSON PLAN



Subject/course: _____

Lesson duration: _____

Topic: _____

Date: _____

Learning Goals: _____

INSTRUCTIONS

WARM UP

CLOSURE

ASSIGNMENT

WRITE A LETTER OF
APPRECIATION
TO YOURSELF

GOOD
JOB!!

well
done!

Name: _____

Date: _____

CLOTHES MATCHING

Look, read and match. Use different colours.



SOCKS



SHOE



DRESS



CAP



T-SHIRT



TROUSERS



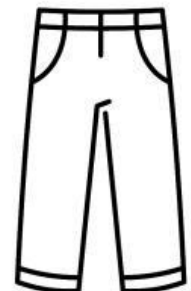
GLOVES



SKIRT



SHORTS



SWEATER

Name: _____

THE WEATHER

Match the drawing with the words. Use different colours.



WINDY



SNOWY



RAINY



STORMY



CLOUDY



SUNNY




TORNADO



PARTLY CLOUDY



FOGGY



LIGHTNING













Name: _____

Date: _____

Landscapes

Look at the pictures and write the words in the correct place

Fence	Power lines	Pine tree	Path
Bridge	Lighthouse	Palm tree	Boat
Windmill	Sunflowers	Lavender	Ship

 <input type="text"/>	 <input type="text"/>	 <input type="text"/>
 <input type="text"/>	 <input type="text"/>	 <input type="text"/>
 <input type="text"/>	 <input type="text"/>	 <input type="text"/>
 <input type="text"/>	 <input type="text"/>	 <input type="text"/>

MENTAL MATH

ADDITION AND SUBTRACTION: SET 3

Name: _____ Class: _____

Learning goal: Practice your mental arithmetic skills.

$13 + 35 =$

$23 - 17 =$

$43 + 19 =$

$78 + 5 =$

$43 - 34 =$

$25 - 16 =$

$5 + 88 =$

$36 - 15 =$

$26 + 18 =$

$51 + 11 =$

$81 - 11 =$

$32 - 26 =$

$12 + 24 =$

$25 - 19 =$

$32 + 17 =$

$34 + 36 =$

$37 - 13 =$

$25 - 15 =$

$31 + 67 =$

$63 - 28 =$

$43 + 14 =$

$41 + 42 =$

$72 - 18 =$

$26 - 12 =$

$13 + 15 =$

$45 - 22 =$

$62 + 52 =$

$44 + 17 =$

$92 - 11 =$

$72 - 34 =$

$12 + 95 =$

$23 - 15 =$

$33 + 16 =$

$13 + 8 =$

$25 - 13 =$

$31 - 18 =$

Name: _____

Date: _____

How many?

Count the autumn objects and write the numbers (1-10) in the boxes.

