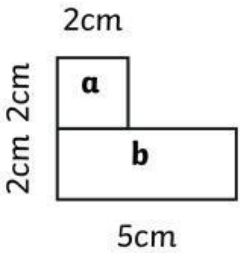
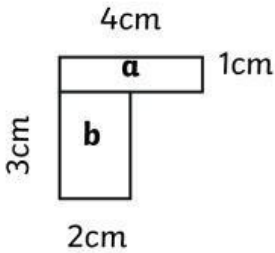
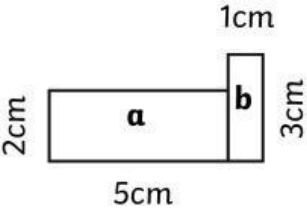
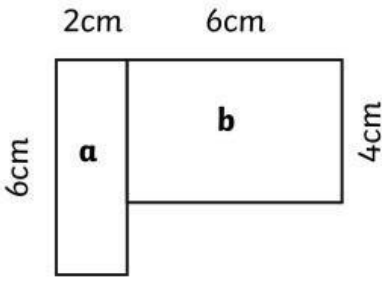
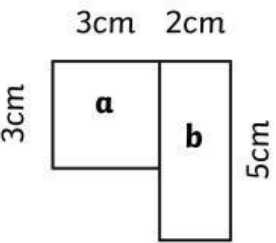
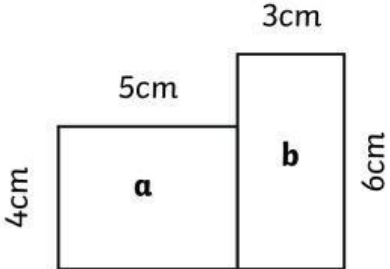


Area of Compound Shapes

Calculate the area of each rectangle. Then, calculate the area of the whole compound shape.

Note: Compound shapes are not to scale.

<p>1)</p>  <p>area a: _____ cm^2 area b: _____ cm^2 total: _____ cm^2</p>	<p>2)</p>  <p>area a: _____ cm^2 area b: _____ cm^2 total: _____ cm^2</p>
<p>3)</p>  <p>area a: _____ cm^2 area b: _____ cm^2 total: _____ cm^2</p>	<p>4)</p>  <p>area a: _____ cm^2 area b: _____ cm^2 total: _____ cm^2</p>
<p>5)</p>  <p>area a: _____ cm^2 area b: _____ cm^2 total: _____ cm^2</p>	<p>6)</p>  <p>area a: _____ cm^2 area b: _____ cm^2 total: _____ cm^2</p>

