

Name:

Class:

MATH FOR ENGLISH 1 - Term 2

Time: 25 minutes

1

Match.

$5 + 4$

$8 - 3$

$10 - 6$

$9 + 1$

$7 - 5$

four

five

nine


two

ten

2

Read and circle.


circle




triangle



diamond



rectangle



oval

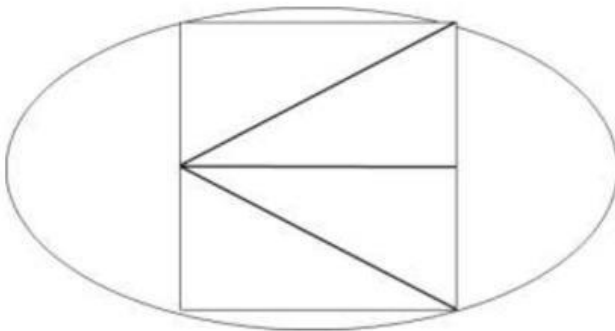


star



3

Study the pattern and answer the questions.



1. How many triangles are there?

There are triangles.

2. How many squares are there?

There is square.

3. How many ovals are there?

There is oval.

4. How many rectangles are there?

There are rectangles

4

Arrange the group of stars from **the least** to **the greatest**.



--	--	--	--	--

5

Answer the questions.

1.



There are ducks than dogs.

A. three fewer

B. three more

C. two fewer

2.



There are ovals than triangles.

A. eight fewer

B. two more

C. six fewer

3.



There are leaves than cups.

A. two fewer

B. two more

C. six more

4. Circle the group has **the greatest** number of hearts. Circle.

5. The number of hearts is the number of stars.

A. greater than

B. less than

C. equal to

6. Which number is **before** 9?

B. 10

B. 9

C. 8

6

Solve math story problems.

1. Ben has 9 lemons. Lucy has 1 lemon. How many lemons do Ben and Lucy have **in all**?

--	--	--	--	--

 lemons

Ben and Lucy have lemons.

2. There are 6 octopi and 9 ostriches. **How many more** ostriches are there than octopi?

--	--	--	--	--

There are more ostriches than octopi.

