



CATHOLIC HIGH SCHOOL
END-OF-YEAR EXAMINATION (2023)
PRIMARY FOUR
SCIENCE
BOOKLET B

Name: _____ ()

Class: Primary 4 - _____

Date: 26 October 2023

Parent's Signature: _____

Booklet A	56
Booklet B	44
Total	100

13 questions

44 marks

Total Time for Booklets A and B: 1 hour 30 minutes

INSTRUCTIONS TO CANDIDATES

Do not turn over this page until you are told to do so.
Follow all instructions carefully.
Answer all questions.
Write your answers in this booklet.

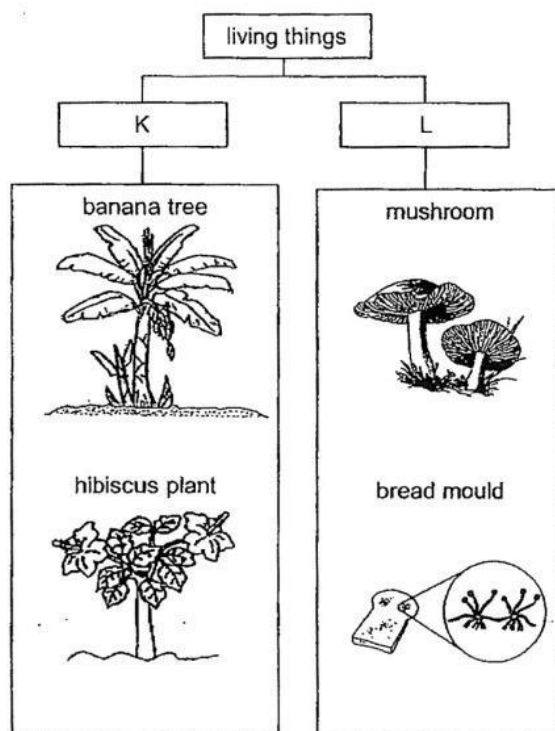
This booklet consists of 14 printed pages, excluding the cover page.

Booklet B (44 marks)

For questions 29 to 41, write your answers in this booklet.

The number of marks available is shown in brackets [] at the end of each question or part question. (44 marks)

29 Study the diagram.



Choose the correct words from the box to give suitable headings for K and L.

[2]

flowering plants non-flowering plants bacteria fungi

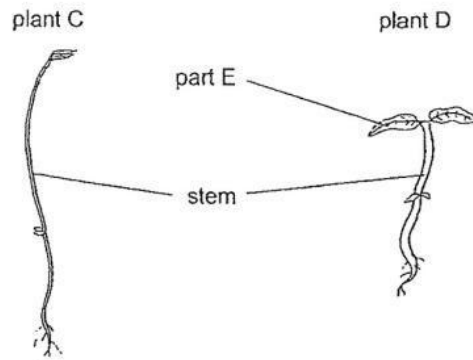
K : _____

L : _____

(Go on to the next page)

SCORE	2
-------	---

30 The diagram shows two plants.




- (a) What is one difference between the stem of plant C and the stem of plant D? [1]

The stem of plant C is _____ than the stem of plant D.

- (b) Part E helps plant D make _____ in the light. [1]

31 The diagram shows a bottle of juice.



Complete the sentences to state if the parts are solid, liquid or gas.

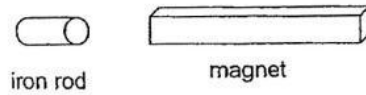
- (a) The cover is a _____. [1]

- (b) Juice is a _____. [1]

(Go on to the next page)

SCORE	4
-------	---

- 32 Puvanesh places a magnet near an iron rod.

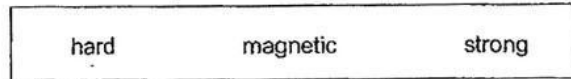


- (a) The iron rod moves towards the magnet. The magnet exerts a

_____ on the iron rod.

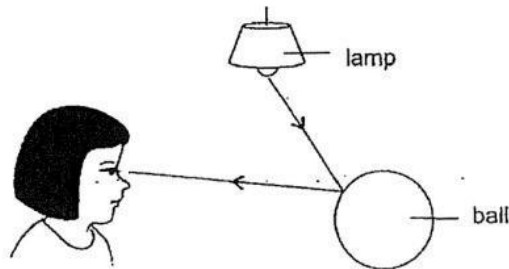
[1]

- (b) Choose the correct word from the box to answer the question below.



Puvanesh's observation shows that iron is a _____ material. [1]

- 33 The diagram shows how Lucian sees a ball



- (a) The _____ from the lamp is _____ by the ball and enters Lucian's eye. [2]

(Go on to the next page)

SCORE	4
-------	---