









Fletë pune me mbledhje të numrave deri 100

1. Gjej numrin që mungon tek mbledhësat e dytë (njëshet dhe dhjetëshen)

$\begin{array}{r} 56 \\ + 2 \text{ 🦆} \\ \hline 84 \end{array}$	$\begin{array}{r} 29 \\ + 6 \text{ 🧤} \\ \hline 90 \end{array}$	$\begin{array}{r} 58 \\ + \text{ 🌳 } 5 \\ \hline 93 \end{array}$	$\begin{array}{r} 56 \\ + 1 \text{ 🍏} \\ \hline 68 \end{array}$
$\begin{array}{r} 63 \\ + 2 \text{ ☀️} \\ \hline 87 \end{array}$	$\begin{array}{r} 51 \\ + 1 \text{ ☂️} \\ \hline 66 \end{array}$	$\begin{array}{r} 57 \\ + 2 \text{ 🧢} \\ \hline 81 \end{array}$	$\begin{array}{r} 24 \\ + 5 \text{ 🚢} \\ \hline 74 \end{array}$

2. Njehso shumat.

	$\square + 36$	
$21 + \square$	65	$48 + \square$
$\square + 43$		$\square + 18$
	$26 + \square$	

	$\square + 63$	
$29 + \square$	80	$41 + \square$
$\square + 36$		$\square + 74$
	$20 + \square$	

	$\square + 54$	
$28 + \square$	93	$71 + \square$
$\square + 12$		$\square + 25$
	$43 + \square$	

	$\square + 27$	
$11 + \square$	52	$44 + \square$
$\square + 31$		$\square + 16$
	$23 + \square$	