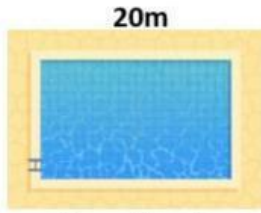
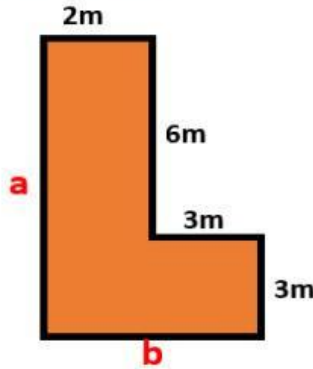


Perimeter



A rectangular swimming pool has a perimeter of 64m. If one of the long sides is 20m, how long are the short sides?

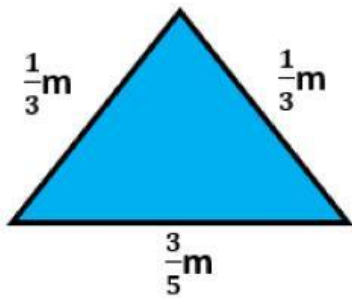
Short side = _____m



a = _____m

b = _____m


Perimeter = _____m



Perimeter = _____m

A school playground is in the shape of a square. If the perimeter of the playground is 107m, how long will each side be?

Each side = _____m



A rectangular field has a perimeter of 114m. The length is twice as long as the width. What are the dimensions of the field?

Length = _____m

Width = _____m

Sarah is building a rectangular garden. She wants to plant flowers along the perimeter and has 48m of fencing to make the 4 sides. She wants the length of the garden to be 4m longer than the width.

Length = _____m

Width = _____m

What will the dimensions be?

