

Name: _____


Class: _____

MOCK TEST 3**Time allowance: 35 minutes****Part A****I. Look. Unscramble and match the words with the correct picture.**


a. ahert •

• A. 

b. psni •

• B. 

c. nithg •

• C. 

d. omno psahse •

• D. 

e. oroatnti •

• E. **2. Circle A, B, or C.****a.** How long does it take the Earth to complete one spin on its axis?**A.** 24 days**B.** 24 hours**C.** 24 years**b.** What causes day and night?**A.** the moon's spinning**B.** the sun's spinning**C.** the earth's spinning**c.** How many planets that orbit the earth?**A.** eight**B.** nine**C.** eighteen

d. Which sentence is TRUE?

- A. The solar system is the Sun and everything that travels around it.
- B. The solar system is the Earth and everything that travels around it.
- C. The solar system is the Moon and everything that travels around it.

e. Does the Sun actually move across the sky?

- A. Yes, it does. The sun moves across the sky.
- B. No. As the Earth spins, the Sun looks as it moves across the sky.
But it does not.
- C. No. The Earth's spinning causes day and night.

3. Read the sentences. Tick (✓) True or False.

	True	False
a. Bones make up the muscles.	<input type="checkbox"/>	<input type="checkbox"/>
b. Bones help us move and give us shape.	<input type="checkbox"/>	<input type="checkbox"/>
c. Bones protect the outside parts of the body.	<input type="checkbox"/>	<input type="checkbox"/>
d. Arms and legs have more than one single bone.	<input type="checkbox"/>	<input type="checkbox"/>
e. Bones can move on their own. Muscles help us move the bones.	<input type="checkbox"/>	<input type="checkbox"/>

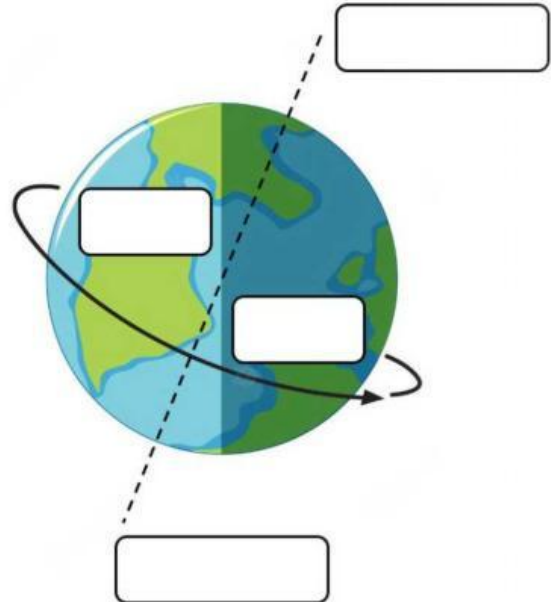

4. Reorder the letters to complete the sentences.

- a. The (k s e n e t l o) _____ supports a human or animal body.
- b. The (r g l b a e c) _____ protects the lungs and heart.
- c. The (j t o n i) _____ is a place in your body where two bones meet.
- d. From midday, the Sun appears to move lower until it disappears below the (h r l n o o z) _____.
- e. The Moon's shape depends on how much light it catches from the Sun during its (o b r t i) _____.

Part B

5. Label the pictures.

Sun Earth axis day night



6. Answer the following questions.

a. Which bone protects the brain?

b. What important organs inside the body does the spine protect?