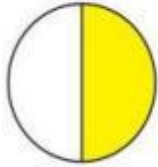


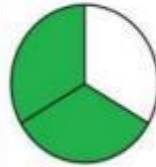
Name: _____ Date: _____

Grade 1 : Fractions

What fraction of each shape is coloured? Select the correct answer.



$\frac{1}{4}$ $\frac{1}{2}$ $\frac{4}{7}$ $\frac{1}{6}$




$\frac{1}{2}$ $\frac{2}{3}$ $\frac{2}{4}$ $\frac{1}{4}$



$\frac{1}{2}$ $\frac{1}{3}$ $\frac{2}{3}$ $\frac{1}{4}$



$\frac{1}{6}$ $\frac{2}{4}$ $\frac{2}{5}$ $\frac{2}{6}$




$\frac{1}{3}$ $\frac{3}{4}$ $\frac{1}{4}$ $\frac{2}{4}$




$\frac{1}{6}$ $\frac{1}{5}$ $\frac{5}{6}$ $\frac{1}{4}$



$\frac{1}{2}$ $\frac{1}{3}$ $\frac{1}{5}$ $\frac{1}{6}$



$\frac{1}{4}$ $\frac{3}{4}$ $\frac{1}{3}$ $\frac{2}{3}$



$\frac{2}{3}$ $\frac{2}{4}$ $\frac{1}{3}$ $\frac{2}{2}$



$\frac{1}{3}$ $\frac{1}{6}$ $\frac{3}{5}$ $\frac{3}{6}$