




On My Own


Name _____

What number does the model represent? Write it as a fraction or mixed number and as a decimal.




How can you shade the grid to represent the decimal?

5. 0.8



6. 0.67



Complete the equation by writing an equivalent decimal, fraction, or mixed number.

7. $\frac{9}{100} = \underline{\hspace{2cm}}$

8. $\underline{\hspace{2cm}} = 0.9$

9. $\underline{\hspace{2cm}} = 0.6$

10. $\underline{\hspace{2cm}} = 1.04$