



2. What is Long? What is Round?



Worksheet - 4


Subject: Maths



Class: I

Name: _____

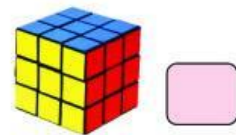
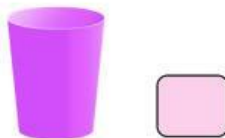
Date : _____

Complete the following :



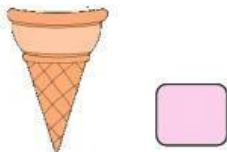
1. Tick (✓) the shape that is similar to cap .





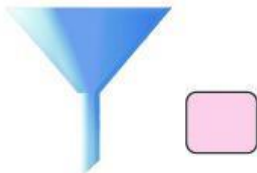
2. Tick (✓) the shape that is similar to box .




3. Tick (✓) the shape that is similar to candle .



4. Tick (✓) the shape that is similar to ball .



5. Tick (✓) the shape that is similar to book .

