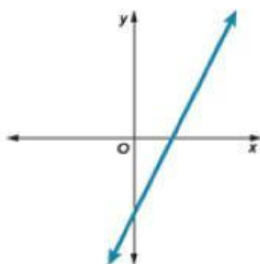


Starter Activity

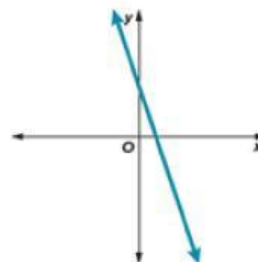
Name: _____

If $f(x) = ax + b$, what can you tell about a and b from the graphs?

1.

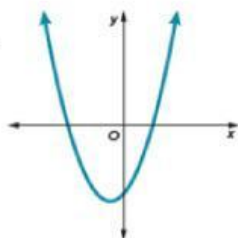


2.



If $f(x) = ax^2 + bx + c$, what can you tell about a and c from the graphs?

3.



4.

