








# Naming Fractions

Draw a line from each fraction to the shape that has the portion of the picture shaded

$\frac{1}{2}$ 😊		😊 five sixths
$\frac{2}{3}$ 😊		😊 one half
$\frac{1}{4}$ 😊		😊 one third
$\frac{1}{3}$ 😊		😊 one fifth
$\frac{3}{4}$ 😊		😊 two thirds
$\frac{1}{5}$ 😊		😊 three fourths
$\frac{5}{6}$ 😊		😊 one fourths