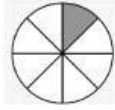

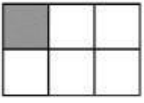


NAME: \_\_\_\_\_

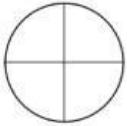
### DAILY EXIT TICKET 1

What fraction of each shape is shaded?



\_\_\_\_\_

Color the model to represent the fraction.




$\frac{1}{4}$



$\frac{1}{3}$

Taylor says that this model is shaded to represent the unit fraction  $\frac{1}{8}$ . Is Taylor correct? Select 2 correct answers.

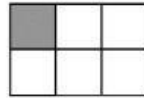


- A Yes, because there are 6 equal parts with 1 part shaded.
- B Yes, because there are 8 equal parts with 1 part shaded.
- C No, because there are not enough white squares.
- D Yes, because a unit fraction has a numerator of 1.
- E No, because a unit fraction has a denominator of 1.

NAME: \_\_\_\_\_

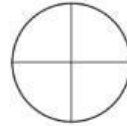
### DAILY EXIT TICKET 1

What fraction of each shape is shaded?



\_\_\_\_\_

Color the model to represent the fraction.




$\frac{1}{4}$



$\frac{1}{3}$

Taylor says that this model is shaded to represent the unit fraction  $\frac{1}{8}$ . Is Taylor correct? Select 2 correct answers.



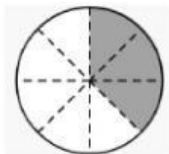
- A Yes, because there are 6 equal parts with 1 part shaded.
- B Yes, because there are 8 equal parts with 1 part shaded.
- C No, because there are not enough white squares.
- D Yes, because a unit fraction has a numerator of 1.
- E No, because a unit fraction has a denominator of 1.

NAME: \_\_\_\_\_

### DAILY EXIT TICKET 2

Fill in the blanks using the model.


$\frac{\square}{\square}$  of the circle is shaded.



$\frac{\square}{\square}$  of the circle is un-shaded.

$\frac{\square}{\square}$  and  $\frac{\square}{\square}$  make one whole.

Shade  $\frac{3}{6}$  of the figure.



Which expression represents  $\frac{3}{6}$ ?

A  $\frac{1}{3} + \frac{1}{3} + \frac{1}{3}$

B  $\frac{6}{1} + \frac{6}{1} + \frac{6}{1}$

C  $\frac{1}{6} + \frac{1}{6} + \frac{1}{6}$

D  $\frac{1}{2} + \frac{1}{2} + \frac{1}{2}$

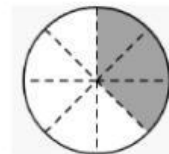
Grade 3 | Unit 5: Fractions | Chapter 7, Lesson 2: Fractions as Part of a Whole | Day 1/2

NAME: \_\_\_\_\_

### DAILY EXIT TICKET 2

Fill in the blanks using the model.

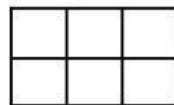
$\frac{\square}{\square}$  of the circle is shaded.



$\frac{\square}{\square}$  of the circle is un-shaded.

$\frac{\square}{\square}$  and  $\frac{\square}{\square}$  make one whole.

Shade  $\frac{3}{6}$  of the figure.



Which expression represents  $\frac{3}{6}$ ?

A  $\frac{1}{3} + \frac{1}{3} + \frac{1}{3}$

B  $\frac{6}{1} + \frac{6}{1} + \frac{6}{1}$

C  $\frac{1}{6} + \frac{1}{6} + \frac{1}{6}$

D  $\frac{1}{2} + \frac{1}{2} + \frac{1}{2}$

Grade 3 | Unit 5: Fractions | Chapter 7, Lesson 1: Understanding Unit Fractions | Day 1/1