

MATCH CARD - PACKAGE NUMBER: 2

GROUP: - CLASS:

Question 1. Look at the picture and choose the correct answer.
What are they doing ?

- A. playing volleyball C. running in a race
B. flying in a race D. dancing



Question 2. Put the words in the correct order.

swimming.

Skating

is

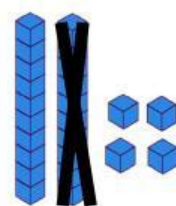
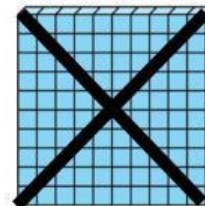
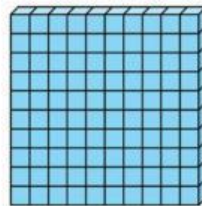
exciting

more

than

Question 3. Read and choose the correct answer.
Which equation is represented by the base-ten blocks?

- A. $221 + 110 = 330$
B. $224 + 110 = 334$
C. $224 - 110 = 114$
D. $221 - 110 = 111$



Question 4. Look the pictures. Which picture is different?



A



B



C



D

