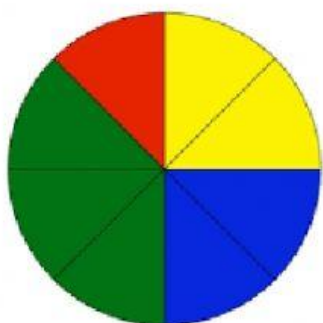


Level 4

1. What is the probability of the spinner landing on yellow?


$$\frac{\boxed{}}{\boxed{}}$$

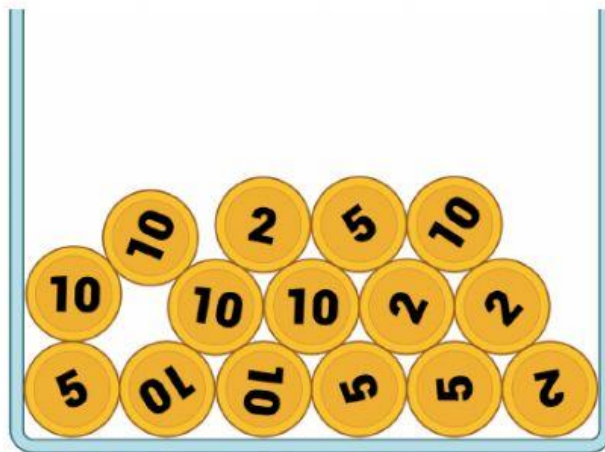
2. What is the probability of throwing a 6?


$$\frac{\boxed{}}{\boxed{}}$$

PMC Method Used: _____

Completed Task: Yes _____ No _____



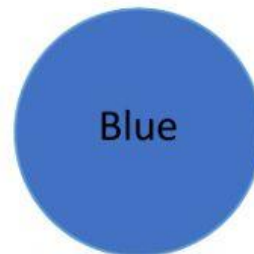

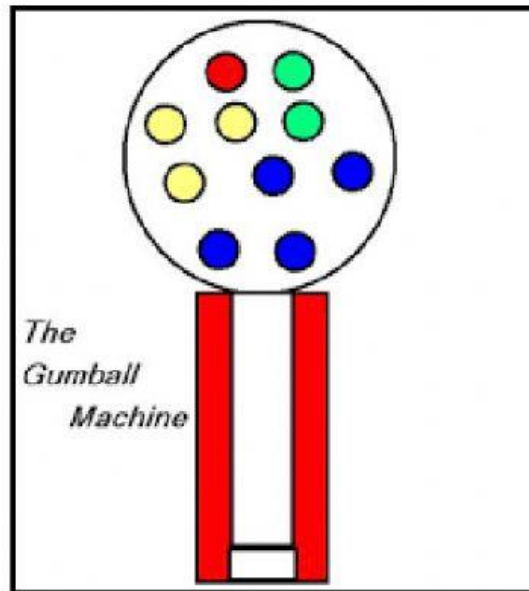
3. Which coin you are **most likely** to pull out of the coin jar?



PMC Method Used: _____

Completed Task: Yes _____ No _____

4. It is **less likely** to get a _____ gum-ball than any other color.



PMC Method Used: _____

Completed Task: Yes _____ No _____