

Tick the right group you need to buy the following things:

 <p>₹ 35</p>		
	<input type="radio"/>	<input type="radio"/>

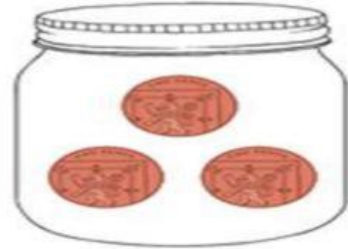
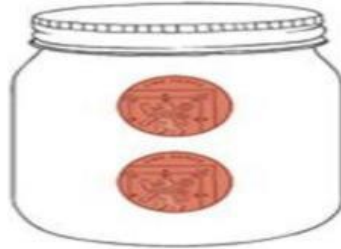
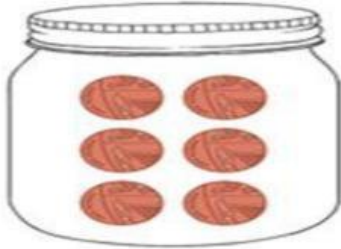

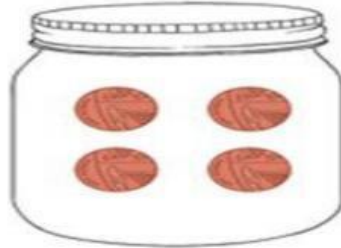
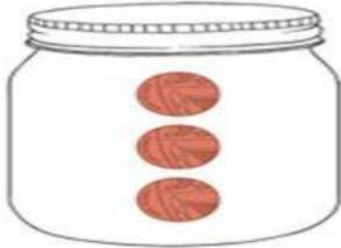
 <p>₹ 220</p>		
	<input type="radio"/>	<input type="radio"/>

Tick the right group you need to buy the following things:

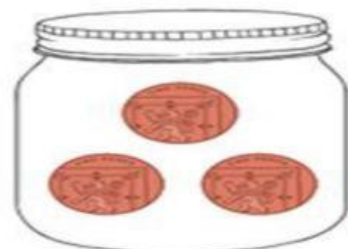
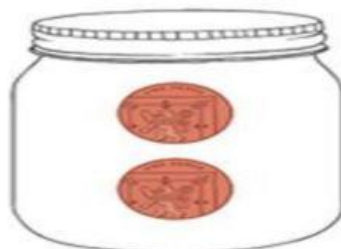
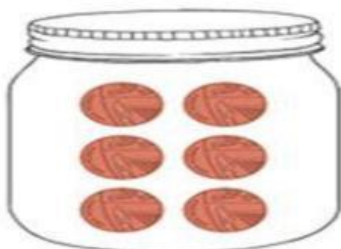

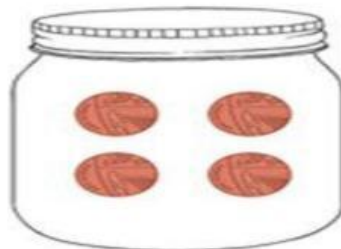
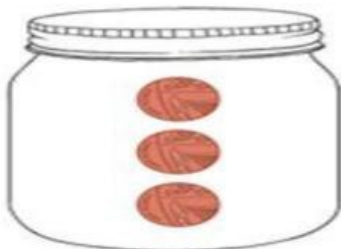
 <p>₹ 60</p>		
	<input type="radio"/>	<input type="radio"/>

 <p>₹ 120</p>		
	<input type="radio"/>	<input type="radio"/>

How much money is in my jar?



How much money is in my jar?



1. Write the total amount shown by the following notes and coins.

   <input type="text"/>	      <input type="text"/>	   <input type="text"/>
---	---	---

1. Write the total amount shown by the following notes and coins.

   <input type="text"/>	      <input type="text"/>	   <input type="text"/>
---	---	---

1. Write the total amount shown by the following notes and coins.

   <input type="text"/>	      <input type="text"/>	   <input type="text"/>
---	--	---