



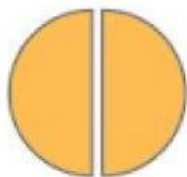
Name: \_\_\_\_\_

Date: \_\_\_\_\_

Class: \_\_\_\_\_

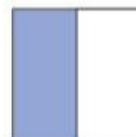


Equal size




**fraction** An equal part of a whole or group.

Example: One out of two parts or  $\frac{1}{2}$  is shaded.



1 whole

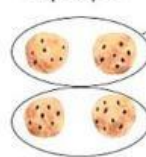


1 half

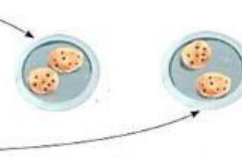
Sharing



2 people



4 cookies



2 cookies each



Part 1. Choose the correct word.

a



Half

Whole

b



Half

Whole

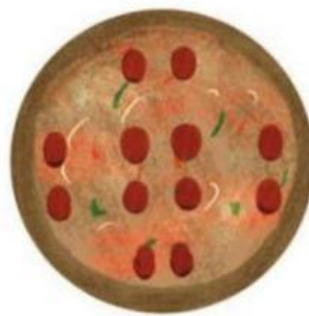
c



Half

Whole

d



Half

Whole

e



Half

Whole

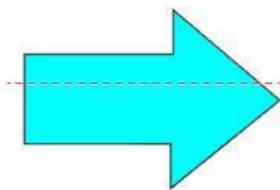
f



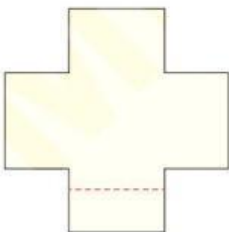
Half

Whole

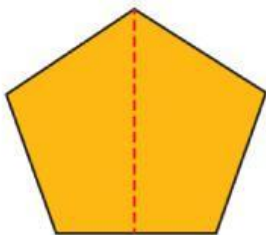
Part 2. Which shapes show a half?



A



B



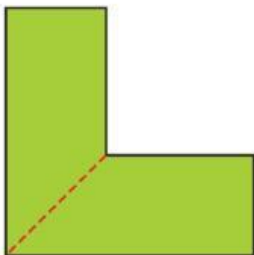
C



D





E





F

Part 3. Find half of each set.



**Part 4. Look, read and write.**



How many?



**Part 5. Solve these word problems.**

1.


a Share the fish into the ponds.



b How many in each?

2.

a Share the balls into the boxes.



b How many in each?

3.

a Share the sandwiches onto the plates.



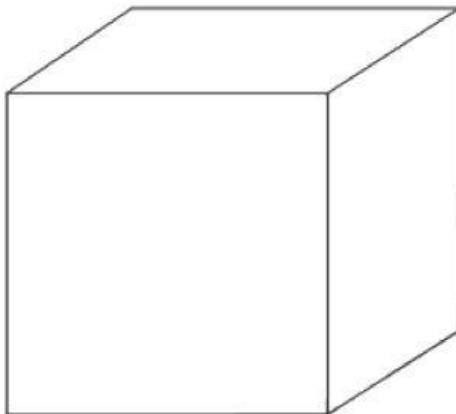
b How many on each?

4.

The farmer collected the eggs from the chickens.

He found 14 eggs.

Put half of the eggs in the box and half of the eggs in the bucket.



How many eggs in the box?

How many eggs in the bucket?