
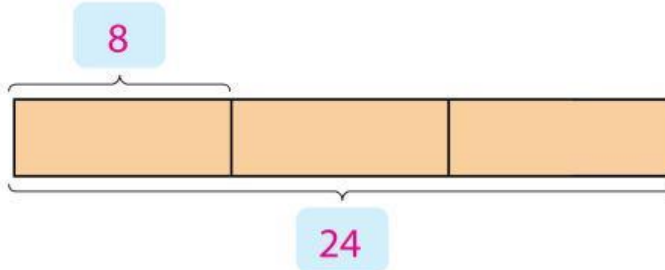




## At Home

1. There are 3 spiders.  
Each spider has 8 legs.  
How many legs are there in all?

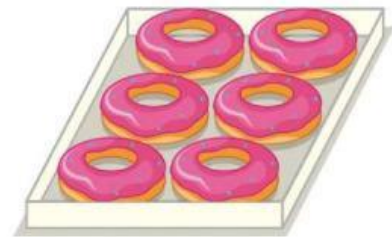
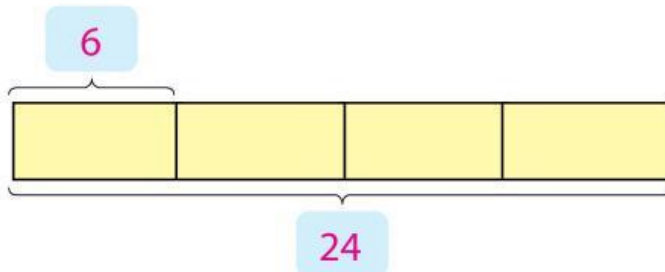


There are 3 groups of 8.

$$8 + 8 + 8 = 24$$

There are 24 legs in all.

2. A bakery sells donuts in boxes of 6 donuts.  
How many donuts are in 4 such boxes?



There are 4 groups of 6.

$$6 + 6 + 6 + 6 = 24$$

There are 24 donuts in 4 boxes.