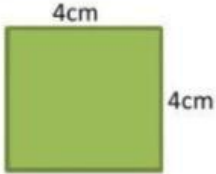





What is area?

To find the area of a rectangle or a square you have to use a formula.

	Question	Answer
1	<p>Square</p> 	<p>The area of this square is</p>  cm^2
2	<p>Rectangle</p> 	<p>The area of this rectangle is</p>  m^2

For square
you multiply
side by side.

For rectangle
you multiply
length by
width.