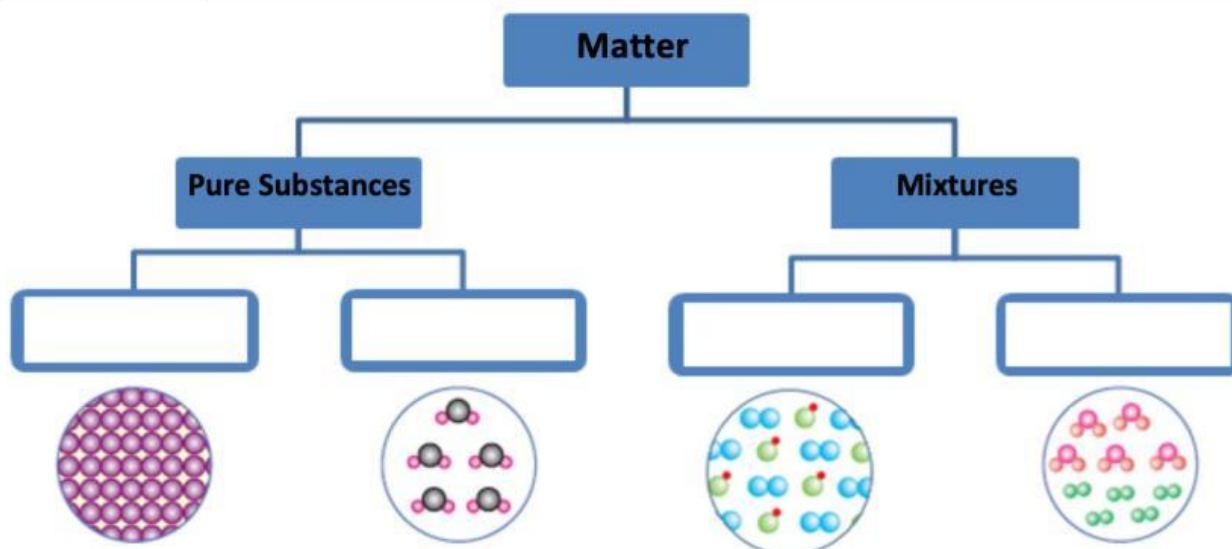



Q.3. Fill in the blanks using the following word bank.

- | | |
|--|---|
| <ul style="list-style-type: none">• compound• homogeneous | <ul style="list-style-type: none">• heterogeneous• element |
|--|---|

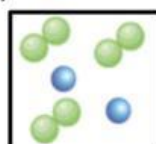


Q.4. Which of the diagrams below represent a compound made of two elements?

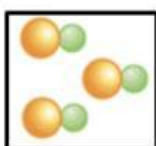
a)



b)



c)



d)

