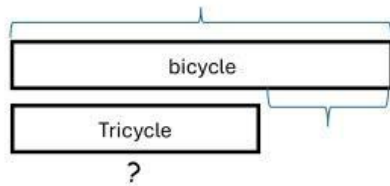


1. A bicycle costs \$75.

A tricycle costs \$20 less than the bicycle.

(a) How much does the tricycle cost?



$$\square - \square = \square$$

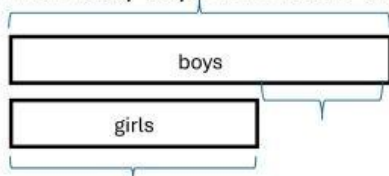
(b) How much do the bicycle and the tricycle cost altogether?

$$\square + \square = \square$$

2. There were 254 girls in a water park.

There were 56 more boys than girls in the waterpark.

(a) How many boys were there in the waterpark?



$$\square + \square = \square$$

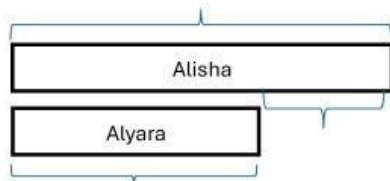
(b) How many boys and girls were there in the waterpark?

$$\square + \square = \square$$

3. Alyara scored 459 points in a game.

Alisha scored 400 more points than Alyara.

(a) How many points did Alisha score?



$$\square + \square = \square$$

(b) How many points did Alyara and Alisha score altogether?

$$\square + \square = \square$$