



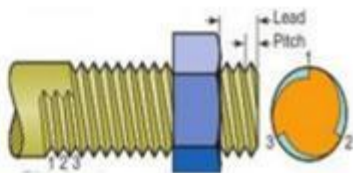
• Activity (2)

Identify the *number of starts* & *direction of thread* below

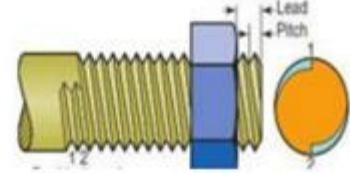
KEYWORD:

Double Starts Thread
Right Hand Thread

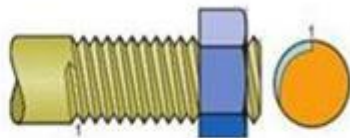
Left Hand Thread
Triple Starts Thread



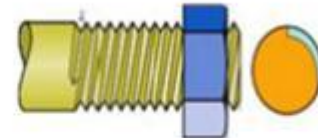
Name [1]



Name [2]



Name [3]



Name [4]