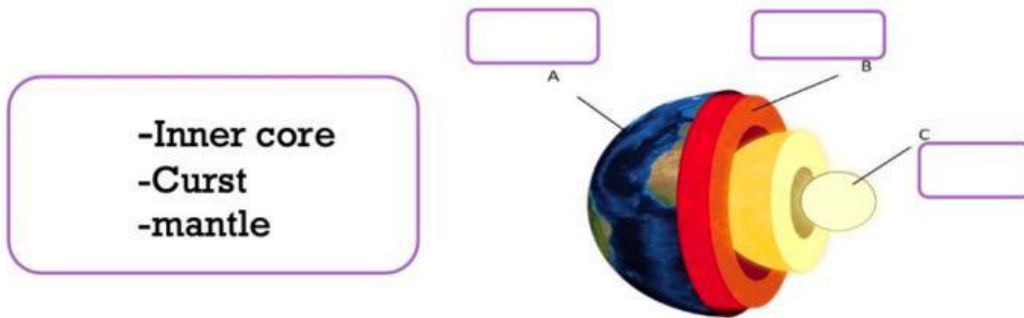





Grade 5



Q2: write inside the Box the correct name of each earth's layer. (3 mark) Bonus



Q3: write inside the Box the correct name of each soil. (3 mark)

<u>Forest</u>	<u>Grassland</u>	<u>Desert</u>
		
<div style="border: 1px solid purple; height: 30px; width: 180px; margin: 0 auto;"></div>	<div style="border: 1px solid purple; height: 30px; width: 180px; margin: 0 auto;"></div>	<div style="border: 1px solid purple; height: 30px; width: 180px; margin: 0 auto;"></div>

Q4: Compare between fast and slow running water. (2mark)

River		
Speed (Fast / Slow)		
Size of rocks carried. (Large / Small)		

Q5: write the name of each type of mountain. (3 mark)

Folded	Volcanic	Fault-blocked
