




























Use the given pictograph to complete the following questions.























Giraffe	    
Zebra	  
Tiger	      
Wolf	         
Bear	 


A. How many wolfs are there?

B. How many animals are there altogether?

C. Name the least animal in the pictograph.

Use the pictograph to complete the questions

Flavor	Number of Votes
Chocolate	   
Vanilla	   
Chocolate Chip	      
Cookie Dough	   
Strawberry	  

KEY
 = 2 votes

1. What two flavors did the students like the least?
2. How many students voted for either cookie dough or strawberry?
3. How many more students voted for chocolate chip than vanilla?
4. How many votes were there in all?