



# CAMPBELL ACADEMY

## Q2 REVIEW IN SCIENCE 2

Name : \_\_\_\_\_

Date : \_\_\_\_\_

Score : \_\_\_\_\_

35




A. Arrange the rumble piece of picture into a Flower. (4

points) roots

stem

flower

leaves




B. What do plants need to grow? Matching type. (4 points)



sun



air

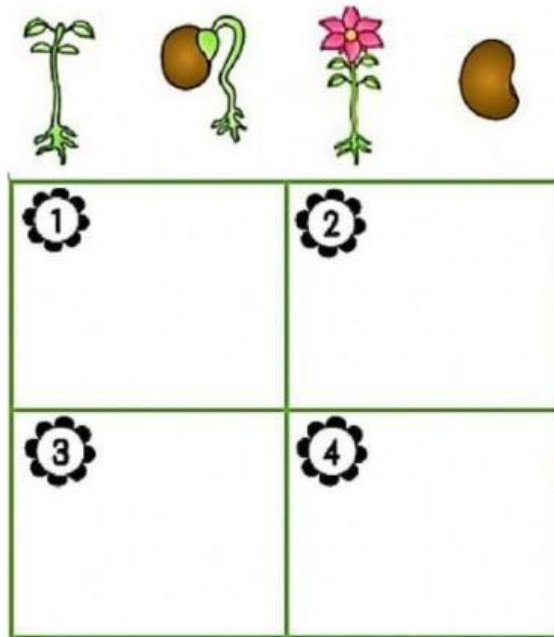


soil



water

C. Arrange the plant life cycle. (4 points)



F. Find which group does the animals belong. (6 points)



Insects		
Amphibians		
Mammals		
Fish		
Reptiles		
Birds		

G. Drag the pictures which group it belongs at. ( 8 points)

living

non-  
living



Great Job, you did it!