

Infants B  
Mathematics Mid-Term Test  
February 2020

Name: \_\_\_\_\_

Type these numbers in words.

Example: 20 twenty

a) 13 \_\_\_\_\_

b) 26 \_\_\_\_\_

(  /2)

Type these number names in figures.


Example: nineteen 19

c) twenty-eight \_\_\_\_\_

d) thirty-four \_\_\_\_\_

(  /2)

e) Match the following shapes to their names.



sphere



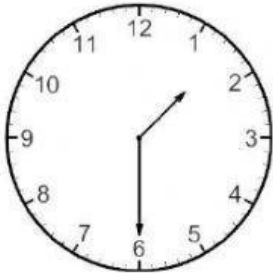
circle



cube

(/3)


f) What is the time? Drag the correct boxes to the clocks.



3 o'clock



12 o'clock




half past 1

(\_\_\_/3)

g) Click the right answer.

I am longer.




(\_\_\_/1)

h) Click the correct answer. Which one holds less?



(  )/1)

i) Click on all the shapes that have one half ( $\frac{1}{2}$ ) coloured.



(  )/3)

Calculate the following.

Add

j)  $11 + 2 =$

(\_\_\_/1)

k)

Tens	Ones
	8
	2
<hr/>	
<input type="text"/>	<input type="text"/>
<hr/>	

(\_\_\_/2)

l) What is the difference between 4 and 5? Example:

$$5 - 4 = 1$$

$$1$$

Katalina has 9 golden apples. Kaden has 4 cherries. What is the difference between the number of fruits?

(    /4)

m) Destinee had 12 flowers. She gave away 2 of them. How many flowers does she have left? Fill in the blanks.

Tens	Ones
<input type="text"/>	<input type="text"/>
- <input type="text"/>	<input type="text"/>
<hr/>	<hr/>
<input type="text"/>	<input type="text"/>

(    /3)