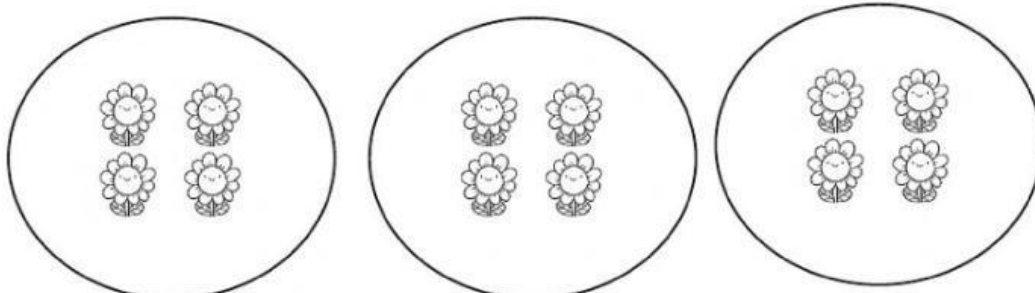


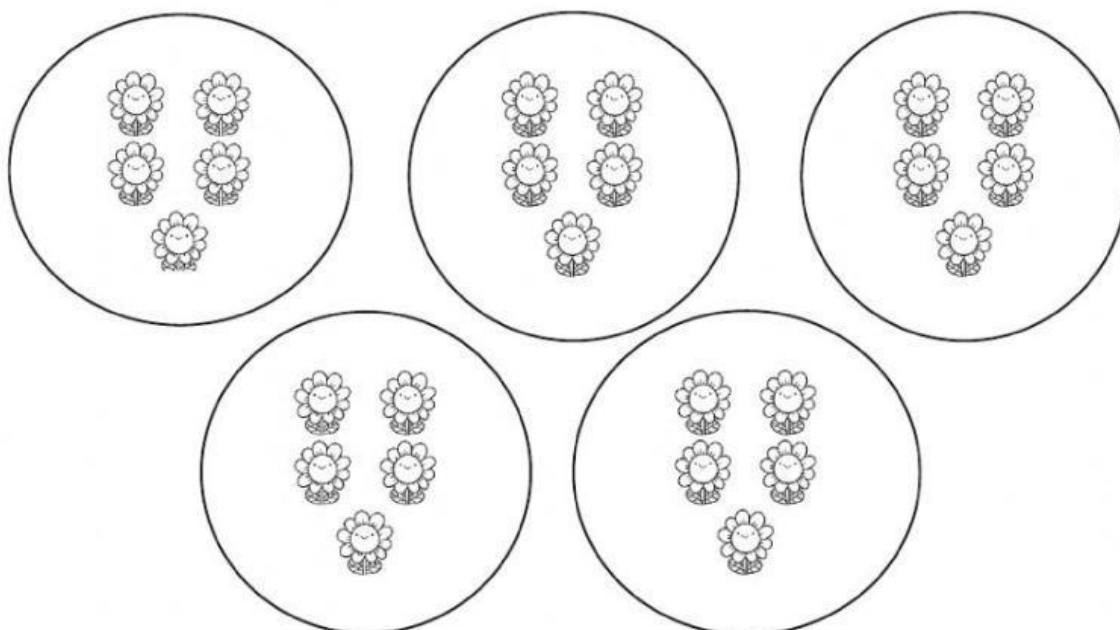


TAREA 1 DE MATEMÁTICA

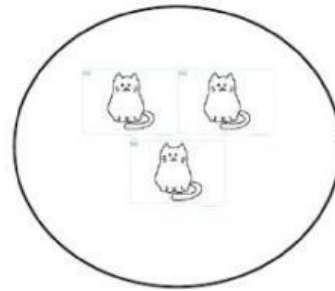
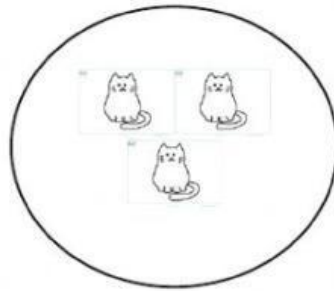
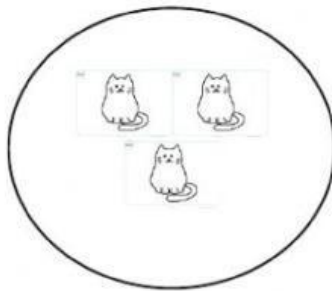
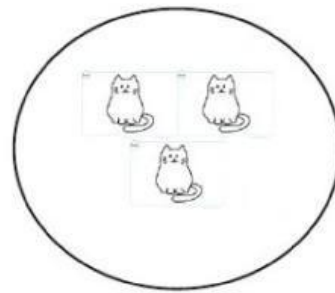
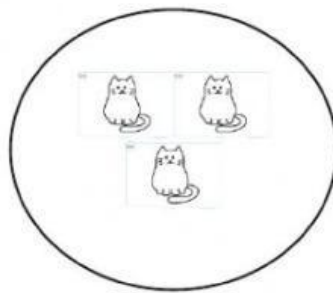
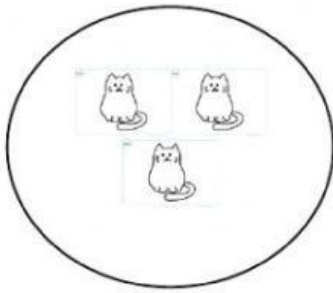
1. RESOLVER LOS SIGUIENTES EJERCICIOS DE NOCIÓN DE MULTIPLICACIÓN



$$\begin{array}{r} ___ + ___ + ___ = ___ \\ ___ \text{ VECES EL } ___ = ___ \\ ___ \times ___ = ___ \end{array}$$



$$\begin{array}{r} ___ + ___ + ___ + ___ + ___ = ___ \\ ___ \text{ VECES EL } ___ = ___ \\ ___ \times ___ = ___ \end{array}$$



$$\begin{array}{ccccccc} + & + & + & + & + & & = \\ \hline & & & & & & \\ \hline & & & & & & \\ \hline & & & & & & \\ \hline \end{array}$$

_____ **VECES EL** _____ = _____

_____ X _____ = _____