






11.DATA HANDLING

Worksheet-5


Name of the Student: _____

Class: II

Raju recorded the number of vehicles that crossed near his house and tabulated them below :

Vehicle	Number of vehicles
	25
	15
	35
	50
	10

Read the above table and answer the question:

1. How many number of  crossed Raju's house ? _____

2. How many  did Raju count ? _____

3. How many  did Raju count ? _____

4. Which vehicle crossed more number of times ? _____

5. Which vehicle crossed the least number of times ? _____