

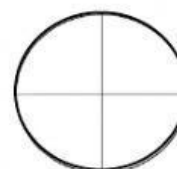
FRACCIONES

I.- RELACIONA AMBAS COLUMNAS CORRECTAMENTE.


1.- Figura dividida o fraccionada en tercios.



2.- Figura dividida o fraccionada en medios.



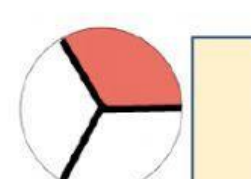
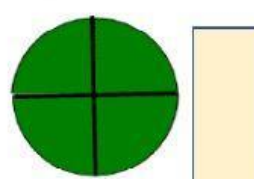
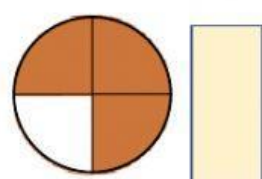
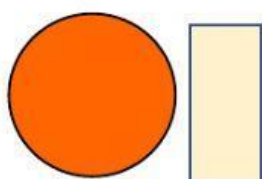
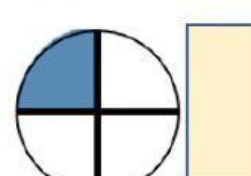
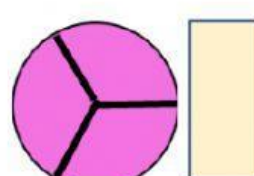
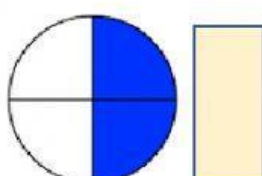
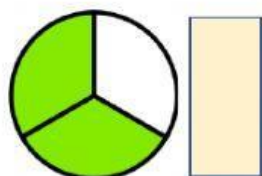
3.- Figura sin fraccionar.



4. Figura dividida en cuartos.



II. - ARRASTRA LA FRACCIÓN A LA IMAGEN QUE LA REPRESENTA.



$$\frac{1}{3}$$

$$\frac{2}{3}$$

$$\frac{3}{3}$$

$$\frac{1}{4}$$

$$\frac{2}{4}$$

$$\frac{3}{4}$$

$$\frac{4}{4}$$

entero
sin
fraccionar