




























Graphing

Name: _____

- Count the number of symbols in each row. Place that number in the last column.
- Answer the questions about the graph.

									total
scientist									
photo									
monarch									
website									
plant									

- Which word has the most symbols?
- Which word has the fewest symbols?
- What is the highest number?
- What is the lowest number?
- Do any words have the same number?
- Are there more plant symbols or website symbols?
- How many more monarch symbols are there than scientist symbols?















 -



 =



monarch

