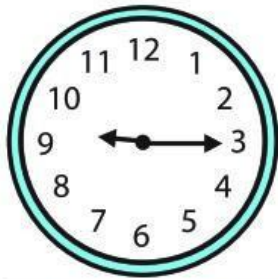


# Learning to Tell Time

Write the time under the first set of clocks. The first one has been done for you.



9:15



---



---



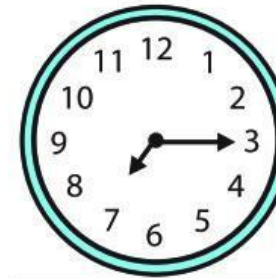
---



---



---



---




---

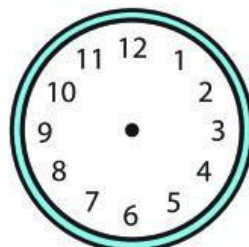
Now draw the hands on these analog clock faces to match the digital time already given. The first one has been done for you.



9:45



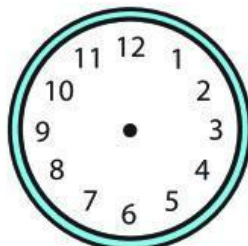
12:15




3:30



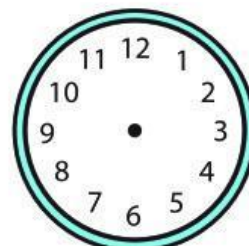
7:00




10:15



6:00



5:15



11:00