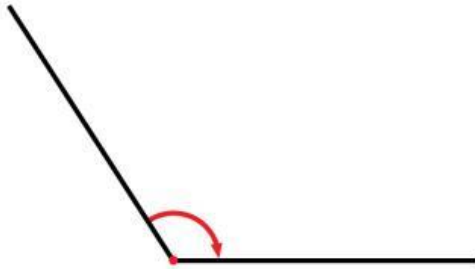
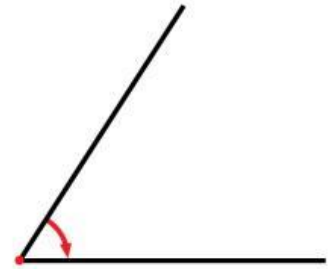


# Schede didattiche sugli angoli

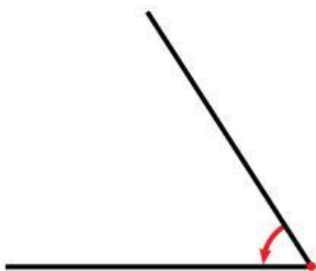
- Scrivi in ogni riquadro se si tratta di un angolo retto, acuto, ottuso, piatto, giro o nullo.



Angolo .....




Angolo .....



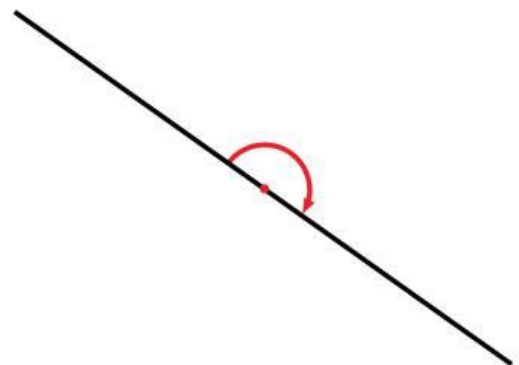
Angolo .....



Angolo .....



Angolo .....



Angolo .....