

# Science Review

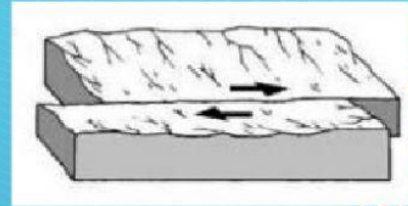
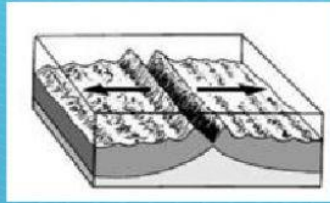
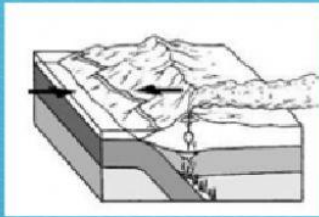
Drag the correct name in each diagram.



Transform

Divergent

Convergent



Write the correct type of boundary for each landform.

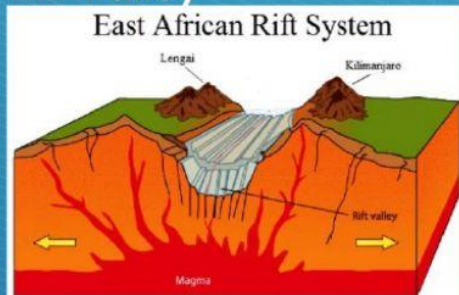
Himalayas



San Andres Fault



Rift Valley



Greenland



The Andes



Select the correct meaning of each prefix given here.

Di = (away / together / along)

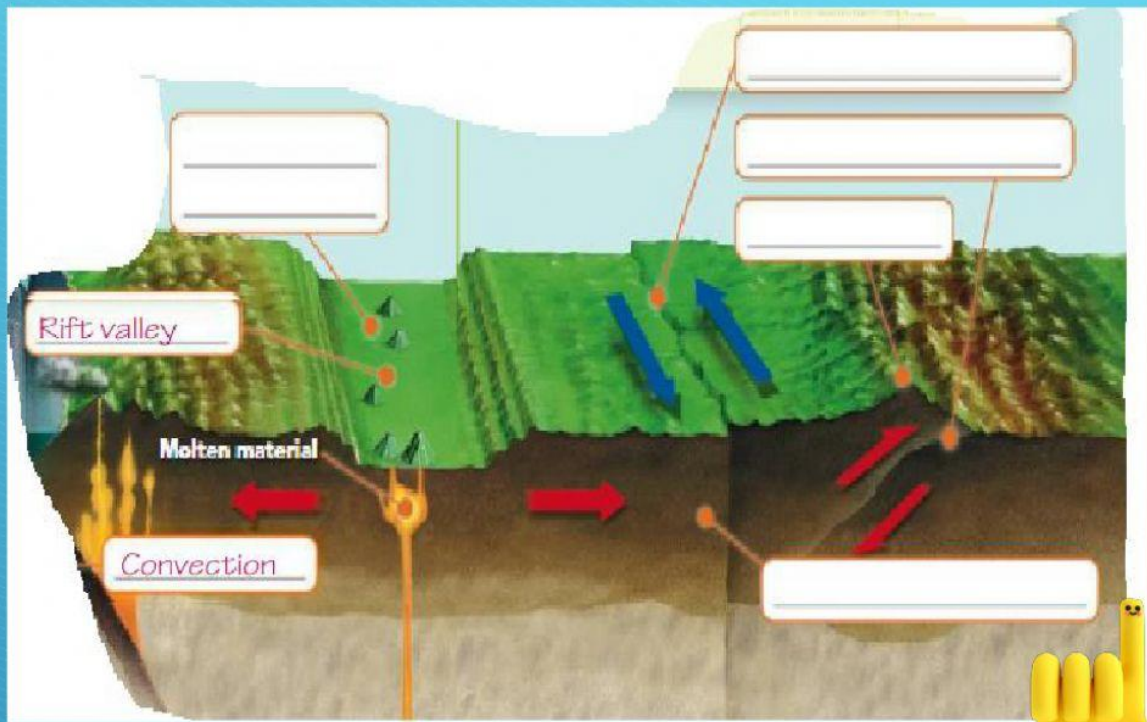
Con = (away / together / along)

Trans = (away / together / along)





Use your book to complete the next diagram.



**Answer the next questions.**

1. Which theory describes the motion of and force driving Earth's plate?
2. Which feature forms at convergent boundaries?
3. What is the motion of Earth's plates like?
4. The San Andres fault is an example of which kind of boundary?
5. What does the meaning of plates?
6. What does the fault form?

