

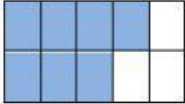
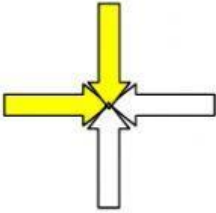
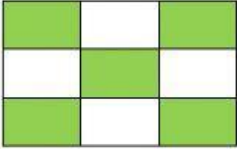
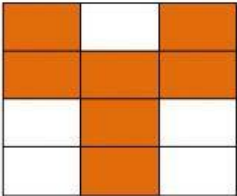
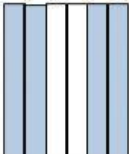



## Fracciones


Relaciona la representación gráfica con la fracción y cómo se lee

Representación gráfica	Se lee	Fracción
	Un medio	$\frac{5}{9}$
	Cinco novenos	$\frac{2}{4}$
	Dos cuartos	$\frac{7}{12}$
	Nueve dieciseisavo	$\frac{1}{2}$
	Siete décimos	$\frac{4}{6}$
	Cuatro sextos	$\frac{7}{10}$
	Siete doceavos	$\frac{9}{16}$




Un tercio

$$\frac{12}{20}$$



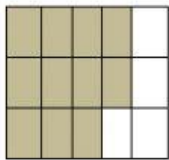
Once quinceavo

$$\frac{4}{5}$$



Tres sextos

$$\frac{1}{3}$$



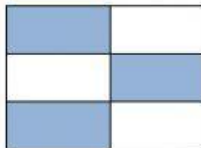
Doce veinteavo

$$\frac{7}{8}$$



Cuatro quintos

$$\frac{3}{6}$$



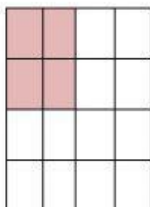
Siete octavos

$$\frac{4}{16}$$



Cuatro dieciseisavo

$$\frac{11}{15}$$



Cuatro cuartos

$$\frac{4}{4}$$