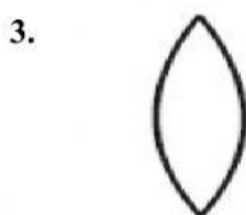
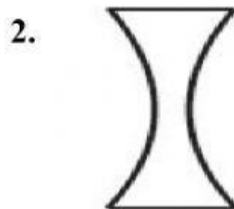
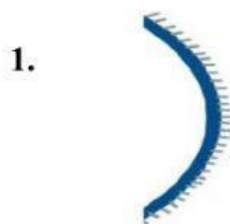


## Light: Mirrors and Lenses

Identify and write down the names of the objects given below



Match the following

• Concave Mirror
• Convex mirror
• Concave lens
• Convex lens

Only virtual, upright, diminished image, outer curve reflective, used in parking lots.

Virtual or real images, thicker in the middle, converges light, used in microscopes.

Real or virtual, inner curve reflective, used by dentists.

Virtual, erect, smaller in size than the object, thinner at the center, diverges the light.