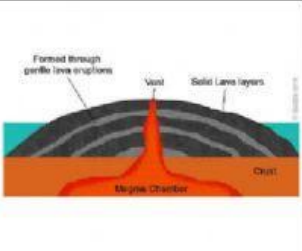
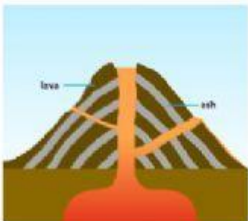



Type of volcanoes.

 <p>Formed through periodic lava eruptions</p> <p>Vent</p> <p>Solid Lava layers</p> <p>Crust</p> <p>Magma Chamber</p>	 <p>Lava</p> <p>ash</p>		Match the pictures. Write down the number
<div></div>	<div></div>	<div></div>	1. Cinder Cone Volcano 2. Shield Volcano 3. Composite Volcano

Composite Volcano	Shield Volcano	Cinder- Cone Volcano	Features
<div></div>	<div></div>	<div></div>	1. Has wide and flat side 2. Has many layers of volcanic rock 3. Made up of small fragment of lava from a single vent
<div></div>	<div></div>	<div></div>	1. Lava burst into air 2. Lava Flows gently 3. Lava flows from high- viscosity