









SUBTRACTION WORD PROBLEMS

Let us learn to subtract

1) Jack has 6 apples. He gives 3 apples to Bella. How many apples are left with Jack?	 $-$  $=$ <input data-bbox="1257 432 1361 521" type="text"/> <input data-bbox="866 566 970 656" type="text"/> <input data-bbox="1042 566 1145 656" type="text"/> apples
2) There are 4 pens in a box. Tia takes out 2 pens from the box. How many pens are left in the box?	 $-$  $=$ <input data-bbox="1249 757 1353 846" type="text"/> <input data-bbox="866 891 970 981" type="text"/> <input data-bbox="1042 891 1145 981" type="text"/> pens
3) Sam has 7 stars. He gives 2 stars to Ben. How many stars are left with Sam?	 $-$  $=$ <input data-bbox="1233 1126 1337 1216" type="text"/> <input data-bbox="866 1261 970 1350" type="text"/> <input data-bbox="1042 1261 1145 1350" type="text"/> stars
4) There are 8 fishes in a pond. 5 fishes swim away. How many fishes are left in the pond?	 $-$  $=$ <input data-bbox="1289 1473 1393 1563" type="text"/> <input data-bbox="866 1619 970 1709" type="text"/> <input data-bbox="1090 1619 1193 1709" type="text"/> fishes