

Name: _____

Look at each clock carefully and write the time below.



____ : ____



____ : ____



____ : ____



____ : ____



____ : ____



____ : ____




____ : ____



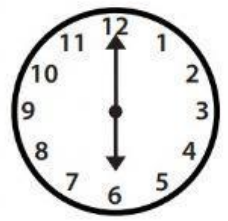
____ : ____




____ : ____



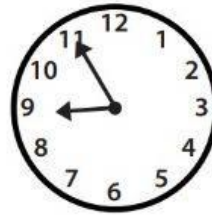
____ : ____



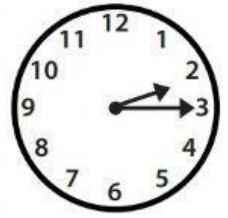
____ : ____



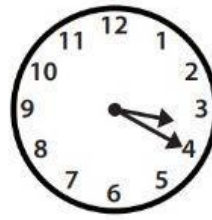
____ : ____




____ : ____



____ : ____



____ : ____



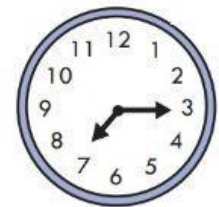
____ : ____



____ : ____



____ : ____



____ : ____