
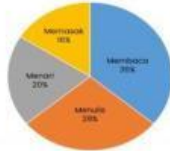
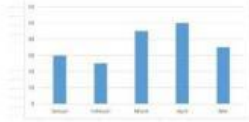


SOAL LKPD LIVE WORK SHEET

Soal Pilihan Ganda

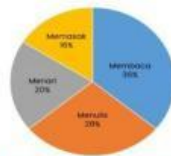
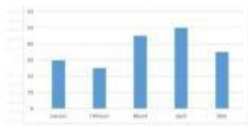
Dibawah ini yang merupakan gambar dari Diagram Lingkaran adalah...



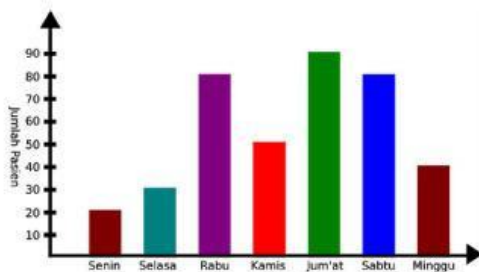
Soal Isian Singkat dan Paragraf

1. Total Sudut yang terbentuk dari Diagram Lingkaran adalah...°
2. $\frac{1}{4}$ bagian lingkaran membentuk sudut...°

Soal Drop Down



Soal Check Box



Tentukan informasi yang benar dari diagram batang diatas

Pasien terbanyak hari jumat

Kenaikan terbanyak hari jumat

Pasien paling sedikit hari senin

Kenaikan terbanyak hari Rabu

Soal Join Arrow

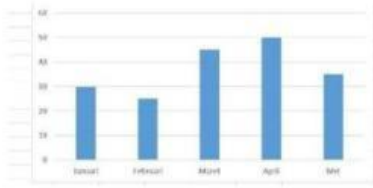


Diagram Lingkaran

Diagram Batang

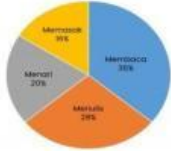

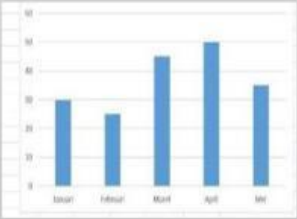
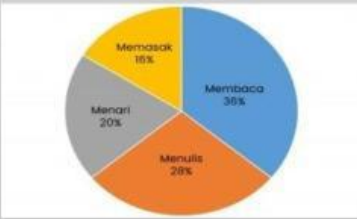
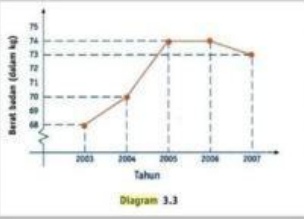


Diagram Garis



Soal Drag and Drop

Pindahkan Diagram disamping ke kotak yang tepat



Diagram Batang

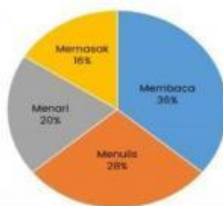
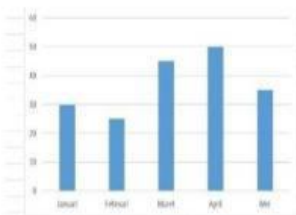


Diagram Garis

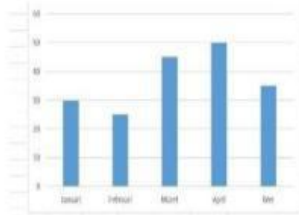


Diagram Lingkaran

Soal Listening

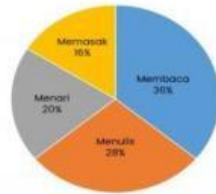


Soal Speaking



benar

salah



benar

salah

Soal Word Search

Cari Kata: STATISTIKA, SAMPEL, DATA, dan ANGKA

S	L	E	H	O	P	L	A	N	C
T	R	S	C	G	K	I	N	A	O
A	F	A	O	K	S	G	W	B	L
T	U	L	N	S	A	M	P	E	L
I	N	E	T	D	C	V	E	N	N
S	N	D	E	S	A	G	N	G	J
T	E	A	N	Y	A	T	B	R	U
I	L	F	T	J	L	Y	A	H	T
K	M	H	Z	A	N	G	K	A	A
A	B	X	C	O	A	C	H	E	S